

**1** What is the total amount of money shown below?



© Anne Rozell @ Believe to Achieve

**2** What is the total amount of money shown below?



© Anne Rozell @ Believe to Achieve

**3** What is the total amount of money shown below?



© Anne Rozell @ Believe to Achieve


**4** What is the total amount of money shown below?



© Anne Rozell @ Believe to Achieve

5 What is the total amount of money shown below?

5



© Anne Rozell @ Believe to Achieve

6 What is the total amount of money shown below?

6



© Anne Rozell @ Believe to Achieve

7 What is the total amount of money shown below?

7



© Anne Rozell @ Believe to Achieve

8 What is the total amount of money shown below?


8



© Anne Rozell @ Believe to Achieve

# 9

What is the total amount of money shown below?



© Anne Rozell @ Believe to Achieve

# 11

What is the total amount of money shown below?



© Anne Rozell @ Believe to Achieve

# 10

What is the total amount of money shown below?



© Anne Rozell @ Believe to Achieve

# 12

What is the total amount of money shown below?



© Anne Rozell @ Believe to Achieve

13 What is the total amount of money shown below?



© Anne Rozell @ Believe to Achieve

15 What is the total amount of money shown below?



© Anne Rozell @ Believe to Achieve

14 What is the total amount of money shown below?



© Anne Rozell @ Believe to Achieve

16 What is the total amount of money shown below?



© Anne Rozell @ Believe to Achieve

**17** What is the total amount of money shown below?



© Anne Kozell @ Believe to Achieve

**19** What is the total amount of money shown below?



© Anne Kozell @ Believe to Achieve

**18** What is the total amount of money shown below?



© Anne Kozell @ Believe to Achieve

**20** What is the total amount of money shown below?



© Anne Kozell @ Believe to Achieve

21

What is the total amount of money shown below?



© Anne Rozell @ Believe to Achieve

22

What is the total amount of money shown below?



© Anne Rozell @ Believe to Achieve

23

What is the total amount of money shown below?



© Anne Rozell @ Believe to Achieve

24


What is the total amount of money shown below?



© Anne Rozell @ Believe to Achieve

Name \_\_\_\_\_

Counting money up to \$10.00



1	2	3	4	5	6
7	8	9	10	11	12
13	14	15	16	17	18
19	20	21	22	23	24

